



# Halves and Fourths




$$\frac{1}{2} \quad \frac{1 \text{ part is shaded}}{2 \text{ parts in total}}$$




$$\frac{1}{4} \quad \frac{1 \text{ part is shaded}}{4 \text{ parts in total}}$$

Answer each question below with  $\frac{1}{2}$  or  $\frac{1}{4}$ .




How much of the pizza is left?

\_\_\_\_\_




How much of the pizza is left?

\_\_\_\_\_




How much of the pizza is left?

\_\_\_\_\_




How much of the watermelon is left?

\_\_\_\_\_



How much of the watermelon is left?

\_\_\_\_\_



How much of the watermelon is eaten?

\_\_\_\_\_